

4-H Sheep

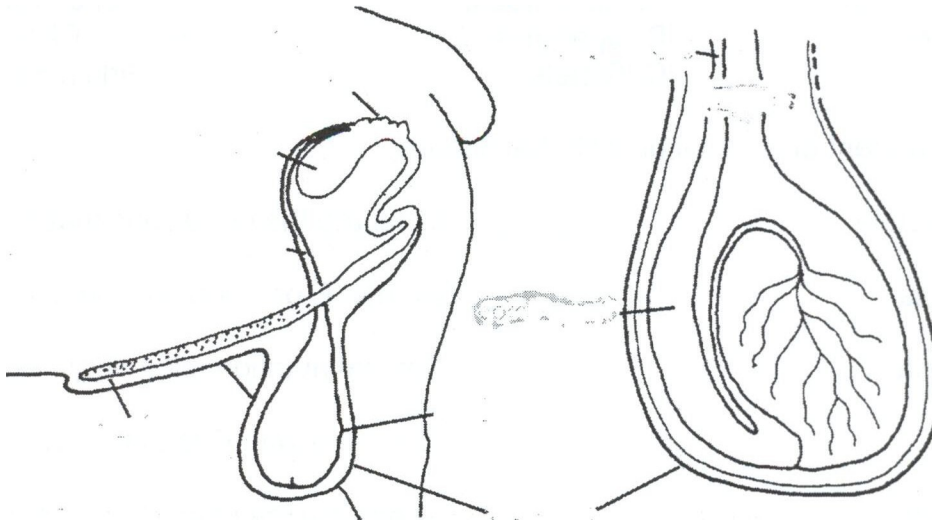
Jasper County
Derived from Pulaski
County Record Sheet B
Grade 8

Name _____ 4-H Club _____

Leader Signature: _____

1. Find the genotype and phenotype of the following: Ram is an RR and the Ewe is an Rr.

2. Identify the male parts of the reproductive system:



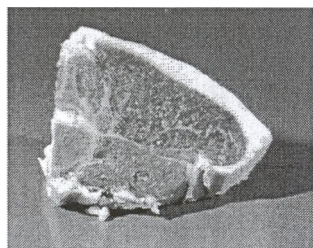
3. Creep feeds need to have _____ to _____ percent protein, while lambs that reach 50-60 pounds require _____ to _____ protein levels.

4. All sheep should have plenty of clean fresh _____ in front of them at all times.

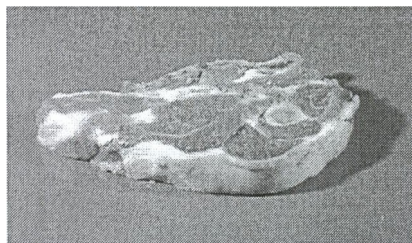
5. Make a list of items that you will need to bring with you to the fair for your sheep project:

_____	_____
_____	_____
_____	_____
_____	_____

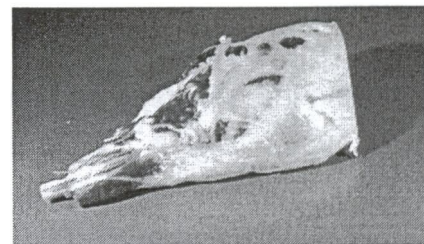
6. Identify the following cuts of lamb:



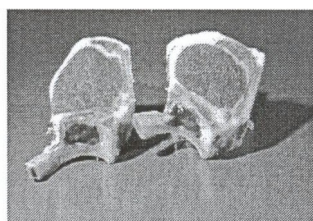
- A. Arm Chop
- B. Loin Chop
- C. Sirloin Steak



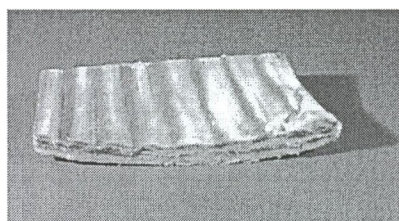
- A. Arm Chop
- B. Loin Chop
- C. Sirloin Steak



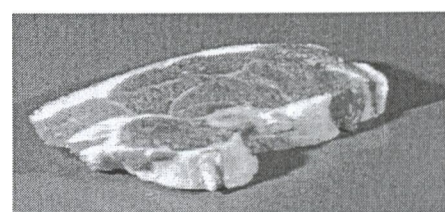
- A. Shoulder Roast
- B. Loin Roast
- C. Whole Leg



- A. French Rib Chop
- B. Sirloin Steak
- C. Arm Chop



- A. Rack Roast
- B. Spareribs
- C. Riblets



- A. French Rib Chop
- B. Loin Chop
- C. Sirloin Steak

7. Match the treatment or prevention with the disease:

- | | |
|---------------------|--|
| A. Enterotoxemia | _____ Eliminate the conditions that cause it |
| B. Coccidiosis | _____ Vitamin E or selenium injections |
| C. Pneumonia | _____ Optimal nutrition, clean dry fleece |
| D. Navel ill | _____ Vaccinate with Clostridium type D |
| E. Sore Mouth | _____ Good balance of calcium to phosphorus |
| F. Stiff Lamb | _____ Drugs and feed additives help control |
| G. Urinary Calculi | _____ Vaccinate the flock |
| H. Club lamb fungus | _____ apply iodine and clean lambing areas |

8. Meat from sheep older than 12 months is referred to as _____.

Answers to all the questions can be found in the "Sheep Resource Handbook" 4-H 194R