

PURDUE EXTENSION BOONE COUNTY

4-H Utility Goat Worksheets

Grade 4-C



Name: _____

4-H Club: _____

Date: _____

Choosing An Animal

1-3. ID the following Breeds of Goats:

1. _____



2. _____



3. _____



4. What is the Latin name for goat? _____


5. The _____, a dairy goat breed, is the oldest known registered breed in the world.

6. LaManchas have two types of ears

a. _____ ear; very little and no _____

b. _____ ear; maximum of _____ inches in length.

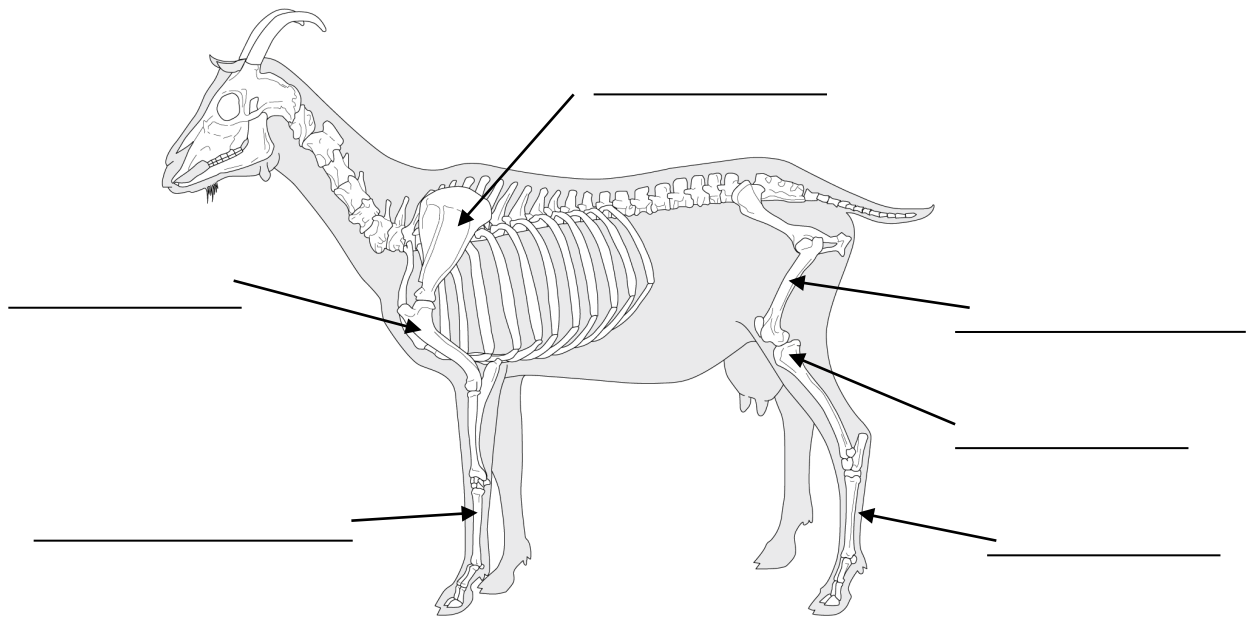
7-14 Label the Following:



15. Much smaller than the standard dairy goat breeds and known to produce approximately 1 quart of high fat milk per day for up to 10 months. _____

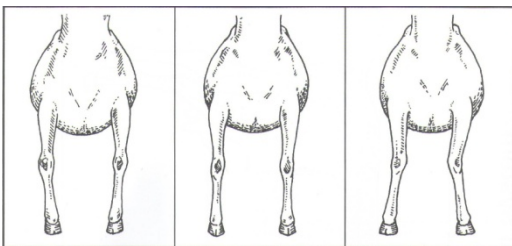
16. This goat was selected for specific traits during development including rapid growth rate, increased fertility, good mothering skills and soundness in feet and legs. _____

17-22. Label the following:



23. Circle which of the below pictures represent the idea leg structure of a goat.

Front Legs



Back Legs

